



Name: _____

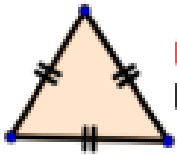
Year 5

Date out: 03.05.24


Date in: 08.05.24

Friday 3rd May

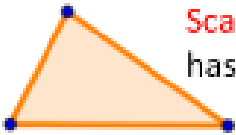
Properties of triangles and quadrilaterals



Equilateral Triangle
has three equal sides



Isosceles Triangle
has two equal sides



Scalene Triangle
has no equal sides

<p>Rectangle</p> <ul style="list-style-type: none">• Opposite sides are equal• All interior angles are 90°	<p>Square</p> <ul style="list-style-type: none">• All four sides are equal• All interior angles are 90°
<p>Parallelogram</p> <ul style="list-style-type: none">• Opposite sides are equal and parallel• Opposite interior angles are equal	<p>Rhombus</p> <ul style="list-style-type: none">• All four sides are equal• Opposite interior angles are equal
<p>Trapezoid</p> <ul style="list-style-type: none">• One pair of opposite sides is parallel	<p>Kite</p> <ul style="list-style-type: none">• Two pairs of adjacent sides are equal• One pair of opposite interior angles are equal

Click on the link to complete the quiz.

Blooket

<https://play.blooket.com/play?hwId=6630efd004a95ce4588fc291>

You must complete at least one battle in the Tower of Doom!

Remember to type in your first name (no nicknames).



Name: _____

Year 5
Date out: 03.05.24
Date in: 08.05.24